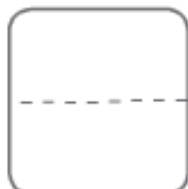
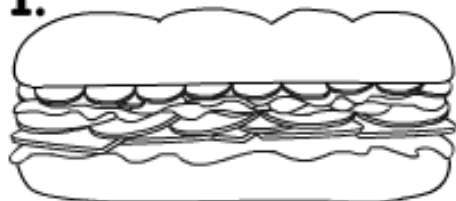


Measure Length

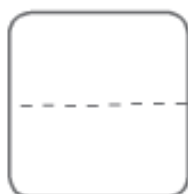
1.



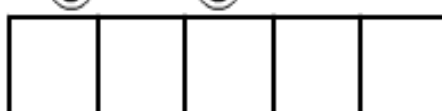
2.



3.



4.



5.



6.



7.



8.



Teacher: Measure each object by counting how many squares equal the object's length. Write the number of squares in the box next to the picture.